

Total Questions : 35

Time : 1 hr.

Guidelines for the Candidate

1. You will get additional ten minutes to fill up information about yourself on the OMR Sheet, before the start of the exam.
2. Write your **Name, School Code, Class, Section, Roll No.** and **Mobile Number** clearly on the **OMR Sheet** and do not forget to sign it. We will share your marks / result and other information related to SOF exams on your mobile number.
3. The Question Paper comprises four sections:
General Awareness (20 Questions), **Current Affairs** (5 Questions), **Life Skills** (5 Questions) and **Achievers Section** (5 Questions).
Each question in Achievers Section carries 2 marks, whereas all other questions carry 1 mark each.
4. All questions are compulsory. There is no negative marking. Use of calculator is not permitted.
5. There is only ONE correct answer. Choose only ONE option for an answer.
6. To mark your choice of answers by darkening the circles on the OMR Sheet, use **HB Pencil** or **Blue / Black ball point pen** only.
E.g.

Q.10 : What would you keep in an aquarium?

- A. Cats B. Dogs C. Fish D. Cows

As the correct answer is option C, you must darken the circle corresponding to option C on the OMR Sheet.

10. (A) (B) ● (D)

7. Rough work should be done in the blank space provided in this booklet.
8. Return the OMR Sheet to the invigilator at the end of the exam.
9. Please fill in your personal details in the space provided before attempting the paper.



DO NOT OPEN THIS BOOKLET UNTIL ASKED TO DO SO

Name:.....

SOF Olympiad Roll No.:..... Contact No.:.....

GENERAL AWARENESS

- 1 'Kakapo' is a critically endangered parrot. It is native to which country?



A. South Africa B. Madagascar C. New Zealand D. India

- 2 A blacksmith makes which of the following items?

A. Shoe, Nails, Wooden table B. Bolts, Nails, Wooden table
C. Trowel, Nails, Axes D. Bricks, Bangles, Bolts

- 3 Which layer of atmosphere contains the Ozone layer?

A. Troposphere B. Stratosphere
C. Mesosphere D. Thermosphere

- 4 Which animal changes the colour of its fur with season?



Giraffe



Arctic Fox



Tiger



Zebra

- 5 Which of the following food items is usually made by frying?



Cake



Idli



Dhokla



Samosa

- 6 The road sign shown in the given picture refers to

A. No entry B. No overtaking
C. No U-turn D. Give way.



- 7 Which of the following is a Middle Eastern dish consisting of small balls formed of crushed chickpeas?

A. Falafel B. Burger
C. Sushi D. Baklava

- 8 Which among the following classical dance forms originated in Uttar Pradesh?

A. Kathak B. Odissi
C. Sattriya D. Kuchipudi

9 Which of the following is a renewable source of energy?

- A. Coal
 - B. Petroleum
 - C. Solar energy
 - D. CNG
-

10 What is another word for 'timid'?

- A. Brave
 - B. Shy
 - C. Strong
 - D. Bold
-

11 What was the name of the wooden puppet who wanted to become a real boy in a famous children's novel authored by Carlo Collodi?

- A. Popeye
 - B. Pinocchio
 - C. Peter Pan
 - D. Aladdin
-

12 During an earthquake, if you are indoors, then you should _____.

- A. Run to get in the lift immediately
 - B. Get under a strong table or desk
 - C. Stand near a glass window
 - D. All of these
-

13 Which of the following plants is used to make paper?

- A.  Bamboo
 - B.  Mint
 - C.  Coconut
 - D.  Papaya
-

14 Select the correct word to fill in the blank.




The shepherd took care of his _____ of sheep.

- A. Pack
 - B. Troop
 - C. Flock
 - D. Convoy
-

15 Angkor Wat, the Hindu Buddhist temple complex is located in which country?

- A. Malaysia
 - B. Myanmar
 - C. Cambodia
 - D. Indonesia
-

16 Which of the following vehicles can run on electricity?

- A. 
- B. 
- C. 
- D. All of these

17 Identify the yogasana shown in the given picture.

- A. Garudasana
- B. Uttanasana
- C. Tadasana
- D. Trikonasana



18 Study the following arrangement carefully.



(Right)

_____ is second to the right of third item from the left end.

- A. 
- B. 
- C. 
- D. 

19 Unscramble the given letters:

REKBYAOD

Identify to which category does it belong?

- A. It is an input device.
- B. It is an output device.
- C. It is a processing device.
- D. It is both an input and an output device.


20 Identify the sportsperson shown in the given picture.

- A. Usain Bolt
- B. Carl Lewis
- C. Lionel Messi
- D. Pele



CURRENT AFFAIRS

21 Who is the current Chief Minister of Uttar Pradesh?



Yogi Adityanath



Akhilesh Yadav



Keshav Prasad
Maurya

D. None of these

- 22** World Hindi Day is celebrated every year on _____.
A. 10th January
B. 5th June
C. 5th September
D. 10th November
-

- 23** Who is the current Prime Minister of Canada?



Ulf Kristersson



Justin Trudeau



Mark Carney

D. None of these

- 24** Which city will host the 2028 Summer Olympics?

A. Los Angeles B. Paris C. Beijing D. New Delhi

- 25** What was the theme of Earth Day 2025?

A. Our Land, Our Future
B. End Plastic Pollution
C. Our Power, Our Planet
D. Planet vs. Plastic

LIFE SKILLS

- 26** During a class debate, Rima listens carefully to different opinions of others before sharing her own thoughts. Which skill is she using?

A. Self awareness
B. Effective communication
C. Punctuality
D. Honesty

- 27** What should you do if you get locked inside a room?

A. Try to break open the glass window with your hands
B. Stay calm and call out for help loudly
C. Wait for someone to find you
D. Go to sleep

- 28** Which is NOT a good habit?

A. Washing the fruits before eating
B. Eating slowly and chewing our food properly
C. Skipping breakfast every day
D. Playing outdoor for an hour every day

29 Which of the following does **NOT** show good sportsmanship?

- A. Clap for your team
- B. Brag in case you win the game
- C. Respect the decisions of referees
- D. Follow the rules of game

30 Which of the following is the first thing that you should do after returning from school?



ACHIEVERS SECTION

31 Unscramble the given letters to get the name of a tree.

UASDNIR

Now, select the correct statement regarding it.

- A. This tree has breathing roots for exchange of gases.
- B. Leaves of this tree are reduced to spines to prevent water loss.
- C. This tree bears cones instead of flowers.
- D. This tree can grow well in nitrogen deficient soil.

32 Name of which of the following musical instruments is **NOT** hidden in the given word grid?

O	T	E	L	E	P	H
P	R	A	D	I	O	A
I	B	O	N	G	O	R
T	R	U	M	P	E	T
N	N	F	L	U	A	O
V	I	O	L	I	N	N
O	T	U	R	M	U	I
N	O	T	R	O	M	P



33 Select the **INCORRECT** match.

1. Alley – Type of serve in badminton
2. Birdie – A missed shot in tennis
3. Checkmate – A situation in chess where the king is under threat and cannot escape
4. Googly – A ball hit for six runs in cricket

A. 2 and 3 only B. 1, 2 and 4 only C. 1, 3 and 4 only D. 1 and 2 only

34 Identify the number.



- It is an odd number.
- Its tens place digit is one less than its units place digit.
- Its hundreds place digit is units place digit of $250 + 301$.
- Its thousands place digit is largest one digit odd number.

A. 8123 B. 9123 C. 9133 D. 8135

35 Among the given devices which of the following can be directly connected via computer USB port or USB cables?



(1)



(2)



(3)



(4)





(5)

- A. (1) and (4) only B. (1), (2) and (5) only
C. (2), (3) and (4) only D. (1), (2), (3), (4) and (5)
-

SPACE FOR ROUGH WORK

SPACE FOR ROUGH WORK



For latest updates & information, please like  our Facebook page (www.facebook.com/sofworld) or register on www.sofworld.org/subscribe-updates.html

For Level 1 and Level 2 preparation material / free sample papers, please log on to **www.mtg.in**



Head Office: Plot 99, Sector 44 Institutional area, Gurugram -122 003 (HR), India
Email: info@sofworld.org | Website: www.sofworld.org